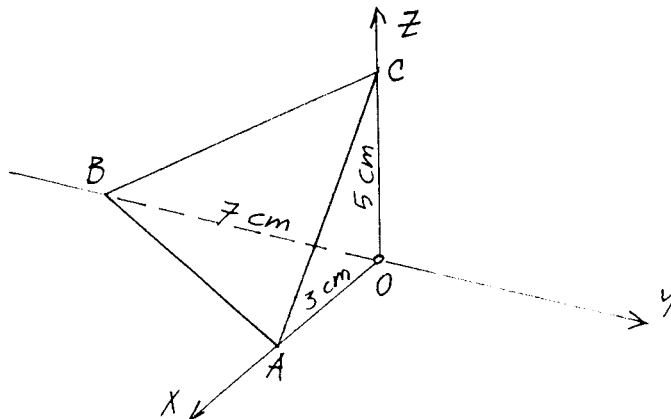


1. Na poševno mejno ploskev ABC prikazane elementarne piramide deluje enakomerna površinska obtežba $\vec{q} = 13.982 \vec{e}_x + 6.439 \vec{e}_y + 1.610 \vec{e}_z$ [kN/cm²]. Normalna napetost v mejni ploskvi $z = 0$ je tlačna in znaša 10 kN/cm². V mejni ploskvi $y = 0$ nastopa samo strižna napetost v smeri x .
- Določi vse komponente tenzorja napetosti v koordinatnem sistemu x, y, z !
 - Razstavi tenzor napetosti na hidrostatični in deviatorični del ter ob upoštevanju Misesovega kriterija plastičnega tečenja preveri, ali je elementarna piramida v elastičnem območju!
 - Določi dolžini stranic \overline{AB} in \overline{AO} po deformaciji piramide!



$$E = 21\,000 \text{ kN/cm}^2$$

$$\sigma_Y = 36 \text{ kN/cm}^2$$


$$\nu = 0.3$$

(35 točk)

2. Na okroglo bakreno palico premera 2 cm želimo nataktni jekleno cev z notranjim premerom 1.996 cm in debelino stene 2 mm. Za koliko moramo segreti cev, da jo lahko nataknejo na jedro? Določi napetosti v cevi in jedru, ko se temperaturi cevi in jedra spet izenačita s temperaturo okolja! Kolikšen je tedaj premer bakrenega jedra? (Trenje med jedrom in cevjo lahko zanemarimo. V vzdolžni smeri deformacije niso ovirane.)

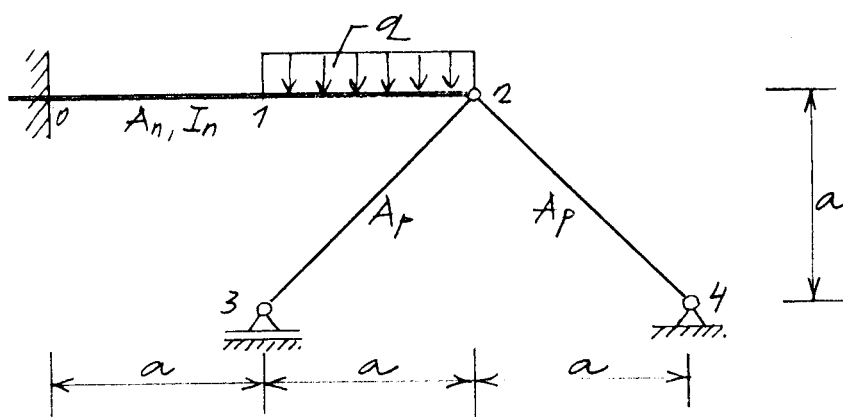
$$E_j = 210\,000 \text{ MPa} \quad \nu_j = 0.30 \quad \alpha_j = 1.2 \cdot 10^{-5} / \text{K}$$

$$E_b = 70\,000 \text{ MPa} \quad \nu_b = 0.32 \quad \alpha_b = 2.4 \cdot 10^{-5} / \text{K}$$



(40 točk)

3. Določi osni sili v palicah $\overline{23}$ in $\overline{24}$ v odvisnosti od obtežbe q !



$$E = 200\,000 \text{ MPa}$$

$$a = 4 \text{ m}$$

$$A_p = 0.0008 \text{ m}^2$$

$$A_n = 0.01 \text{ m}^2$$

$$I_n = 0.0002 \text{ m}^4$$

(35 točk)

Ad 1.) Ebene ABC:

$$\frac{x}{3} - \frac{y}{7} + \frac{z}{5} = 1 \rightarrow \phi = 35x - 15y + 21z - 105 = 0$$

$$\vec{n} = 35\vec{e}_x - 15\vec{e}_y + 21\vec{e}_z$$

$$|\vec{n}| = \sqrt{35^2 + 15^2 + 21^2} = 43,486$$

$$\vec{e}_n = \frac{\vec{n}}{n} \rightarrow \vec{e}_n = 0,805\vec{e}_x - 0,345\vec{e}_y + 0,483\vec{e}_z$$

$$\sigma_{zz} = -10, \quad \sigma_{yy} = \sigma_{yz} = 0$$

$$a) \begin{Bmatrix} p_{mx} \\ p_{my} \\ p_{mz} \end{Bmatrix} = \begin{Bmatrix} 13,982 \\ 6,439 \\ 1,610 \end{Bmatrix} = \begin{bmatrix} \sigma_{xx} & \sigma_{xy} & \sigma_{xz} \\ \sigma_{yx} & 0 & 0 \\ \sigma_{zx} & 0 & -10 \end{bmatrix} \begin{Bmatrix} 0,805 \\ -0,345 \\ 0,483 \end{Bmatrix}$$

$$0,805\sigma_{xx} - 0,345\sigma_{xy} + 0,483\sigma_{xz} = 13,982$$

$$0,805\sigma_{xy} = 6,439 \rightarrow \sigma_{xy} = 8 \text{ kN/cm}^2$$

$$0,805\sigma_{xz} - 0,483 \cdot 10 = 1,610 \rightarrow \sigma_{xz} = 8 \text{ kN/cm}^2$$

$$\rightarrow 0,805\sigma_{xx} = 13,982 + 0,345 \cdot 8 - 0,483 \cdot 8$$

$$\sigma_{xx} = 16 \text{ kN/cm}^2$$

$$[\sigma_{ij}] = \begin{bmatrix} 16 & 8 & 8 \\ 8 & 0 & 0 \\ 8 & 0 & -10 \end{bmatrix}$$

$$I_1^{\sigma} = 16 - 10 = 6$$

$$\sigma^H = \frac{1}{3} I_1^{\sigma} \rightarrow \sigma^H = 2$$

$$b) [\sigma_{ij}^H] = \begin{bmatrix} 2 & 0 & 0 \\ 0 & 2 & 0 \\ 0 & 0 & 2 \end{bmatrix}$$

$$[\Delta_{ij}^H] = \begin{bmatrix} 14 & 8 & 8 \\ 8 & -2 & 0 \\ 8 & 0 & -12 \end{bmatrix}$$

$$I_2^s = \begin{vmatrix} -2 & 0 \\ 0 & -12 \end{vmatrix} + \begin{vmatrix} 14 & 8 \\ 8 & -12 \end{vmatrix} + \begin{vmatrix} 14 & 8 \\ 8 & -2 \end{vmatrix} \rightarrow \boxed{I_2^s = -300}$$

$$f(s) = |I_2^s| - k_M^2 \quad \dots \quad k_M = \frac{6\gamma}{\sqrt{3}}$$

$$f(s) = 300 - \frac{36^2}{3} = -132 \rightarrow \boxed{EZ. ST. !}$$

c) $\frac{1+\nu}{E} = 6,19 \cdot 10^{-5} ; \quad \frac{\nu}{E} = 1,43 \cdot 10^{-5}$

$$\epsilon_{ij} = \frac{1+\nu}{E} \sigma_{ij} - \frac{\nu}{E} I_1^s \delta_{ij}$$

$$\epsilon_{xx} = 10^{-5} (6,19 \cdot 16 - 1,43 \cdot 6) \rightarrow \epsilon_{xx} = 90,476 \cdot 10^{-5}$$

$$\epsilon_{yy} = 10^{-5} (6,19 \cdot 0 - 1,43 \cdot 6) \rightarrow \epsilon_{yy} = -8,571 \cdot 10^{-5}$$

$$\epsilon_{zz} = 10^{-5} (6,19 \cdot -10 - 1,43 \cdot 6) \rightarrow \epsilon_{zz} = -70,476 \cdot 10^{-5}$$

$$\epsilon_{xy} = \epsilon_{xz} = 10^{-5} \cdot 6,19 \cdot 8 \rightarrow \epsilon_{xy} = \epsilon_{xz} = 49,523 \cdot 10^{-5}$$

$$\epsilon_{yz} = 0$$

$$[\epsilon_{ij}] = 10^{-5} \begin{bmatrix} 90,476 & 49,523 & 49,523 \\ 49,523 & -8,571 & 0 \\ 49,523 & 0 & -70,476 \end{bmatrix}$$

$$\overline{AO} : \quad \overline{AO}' = (1 + \epsilon_{xx}) \cdot \overline{AO} \rightarrow \boxed{\overline{AO}' = 3,0027 \text{ cm}}$$

$$\overline{AB} : \quad \vec{r} = -3\vec{e}_x - 7\vec{e}_y \rightarrow |\vec{r}| = \sqrt{3^2 + 7^2} = \sqrt{58}$$

$$\vec{e}_s = \frac{\vec{r}}{r} = -0,394 \vec{e}_x - 0,919 \vec{e}_y ; \quad \epsilon_{ss} = 0 !$$

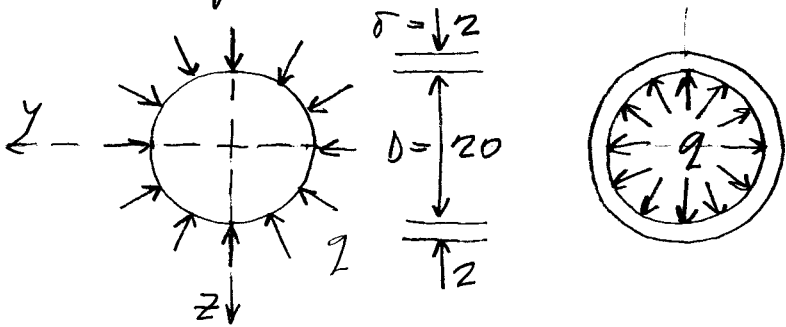
$$\begin{aligned} \epsilon_{ss} &= \epsilon_{xx} \epsilon_{sx}^2 + 2 \epsilon_{xy} \epsilon_{sx} \epsilon_{sy} + \epsilon_{yy} \epsilon_{sy}^2 \\ &= 10^{-5} (90,476 \cdot 0,394^2 + 2 \cdot 49,523 \cdot 0,394 \cdot 0,919 - \\ &\quad - 8,571 \cdot 0,919^2) \rightarrow \boxed{\epsilon_{ss} = 42,670 \cdot 10^{-5}} \end{aligned}$$

$$\overline{AB}' = (1 + \epsilon_{ss}) \cdot \overline{AB} \rightarrow \boxed{\overline{AB}' = 7,6190 \text{ cm}}$$

Ad 2.)

$$\epsilon_{11} = \frac{\sigma'}{\sigma} - 1 = \frac{D'}{D} - 1 = \alpha_j \Delta T = \frac{D' - D}{D}$$

$$\Delta T = \frac{D' - D}{\alpha_j} = \frac{2,0 - 1,996}{1,996 \cdot 1,2 \cdot 10^{-5}} \rightarrow \boxed{\Delta T = 167^\circ \text{C}}$$



Valj: $\sigma_{yy}^b = \sigma_{zz}^b = -q$

cer: $\sigma_{rr}^i = -q$
 $\sigma_{\theta\theta}^i = q \frac{D}{2r}$

$\sigma_{xx}^i = \sigma_{xx}^b = 0$

$$\boxed{\epsilon_{yy}^b = \epsilon_{11}^i}$$

$$\boxed{\Delta T_j = -333^\circ \text{C}}$$

$$\epsilon_{yy}^b = \frac{1}{E_b} (\sigma_{yy}^b - \nu_b \sigma_{zz}^b) \rightarrow \boxed{\epsilon_{yy}^b = -\frac{q}{E_b} (1 - \nu_b)}$$

$$\epsilon_{11}^i = \frac{1}{E_j} (\sigma_{11}^i - \nu_j \sigma_{rr}^i) + \alpha_j \Delta T$$

$$\boxed{\epsilon_{11}^i = \frac{q}{E_j} \left(\frac{D}{2r} + \nu_j \right) + \alpha_j \Delta T}$$

$$\epsilon_{yy}^b = \epsilon_{11}^i \rightarrow -\frac{q}{E_b} (1 - \nu_b) = \frac{q}{E_j} \left(\frac{D}{2r} + \nu_j \right) + \alpha_j \Delta T_j$$

$$\boxed{q = -\frac{E_j E_b \alpha_j \Delta T_j}{E_b \left(\frac{D}{2r} + \nu_j \right) + E_j (1 - \nu_b)}}$$

$$q = \frac{21000 \cdot 7000 \cdot 1,2 \cdot 10^{-5} \cdot 167}{7000 \left(\frac{2}{2 \cdot 0,2} + 0,3 \right) + 21000 (1 - 0,32)}$$

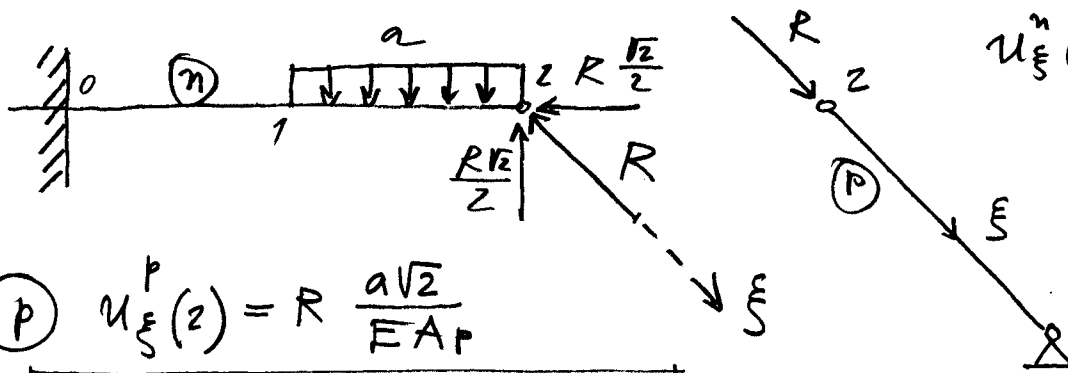
$$\boxed{q = 5,734 \text{ kN/cm}^2}$$

$$\epsilon_{yy}^b = -\frac{5,734}{7000} (1 - 0,32) = -0,000557$$

$$D'_b = 2(1 + \epsilon_{yy}^b) \rightarrow \boxed{D'_b = 1,9989 \text{ cm}}$$

3.)

$N_{23} = 0!$



$u_{\xi}^n(2) = u_{\xi}^p(2)!$

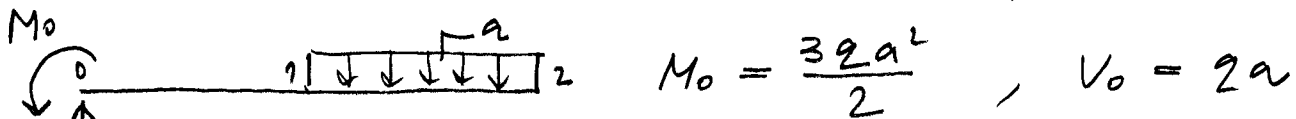
(p) $u_{\xi}^p(2) = R \frac{a\sqrt{2}}{EA_p}$

$u_{\xi}^p(2) = 0,03536 R$

(n) $u_x^{(n)}(2) = -R \frac{\sqrt{2}}{2} \cdot \frac{2a}{EA_n} \rightarrow$

$u_x^{(n)}(2) = -0,00283 R$

$u_z^{(n)}(2) = w_R + w_q = -R \frac{\sqrt{2}}{2} \cdot \frac{(2a)^3}{3EI_n} + w_q$



$M_0 = \frac{3qa^2}{2}$

$V_0 = 2a$

$M_y = V_0 x - M_0 - \frac{q}{2} \langle x-a \rangle^2 = 2ax - \frac{3qa^2}{2} - \frac{q}{2} \langle x-a \rangle^2$

$EI_y w'' = -M_y = -\frac{q}{2} (2ax - 3a^2 - \langle x-a \rangle^2)$

$EI_y w' = -\frac{q}{2} (ax^2 - 3a^2x - \frac{1}{3} \langle x-a \rangle^3) + C_1$

$EI_y w = -\frac{q}{2} (a \frac{x^3}{3} - \frac{3}{2} a^2 x^2 - \frac{1}{12} \langle x-a \rangle^4) + C_1 x + C_2$

$x=0 \dots w=0, w'=0 \rightarrow C_1 = C_2 = 0$

$x=2a \dots w = -\frac{q}{2} (a \cdot \frac{8a^3}{3} - \frac{3}{2} a^2 \cdot 4a^2 - \frac{1}{12} a^4)$

$w_q = q \frac{41a^4}{24EI_n}$

$u_z^{(n)}(2) = q \frac{41a^4}{24EI_n} - R \frac{4\sqrt{2}a^3}{3EI_n}$

$u_z^{(n)}(2) = 10,93333 q - 3,01699 R$

fc. 2: $u_{\xi}^p = u_x^{(n)} e_{\xi x} + u_z^{(n)} e_{\xi z}$

$$0,03536 R = \frac{\sqrt{2}}{2} (-0,00283 R + 10,93333 \text{ g} - 3,01699 R)$$

$$R = 3,562 \text{ g}$$