

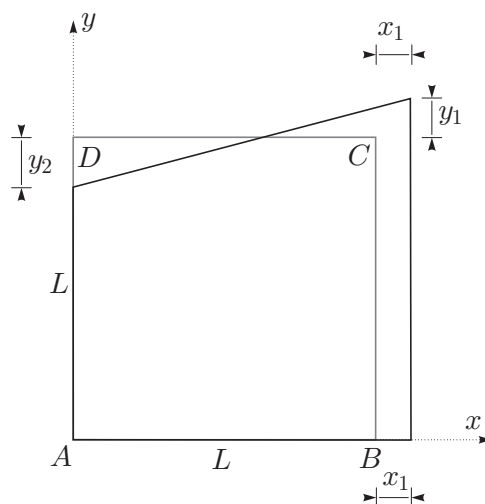
TRDNOST (VŠŠ) - 1. KOLOKVIJ (17. 12. 2009)

Pazljivo preberite besedilo vsake naloge! Naloge so točkovane enakovredno (vsaka 25%)! Pišite čitljivo!
Uspešno reševanje!

1. Kvadratna plošča s stranico dolžine $L = 1$ m se deformira v svoji ravnini, kot kaže slika. Deformacije iz ravnine lahko zanemarimo. Tako deformiranje opišemo s pomiki oblike $\vec{u} = (ax, by + cxy)$. Lega točke A se ne spremeni. Nove koordinate ostalih točk pa so podane s pomiki: $x_1 = 2$ mm, $y_1 = 3$ mm in $y_2 = 1$ mm.

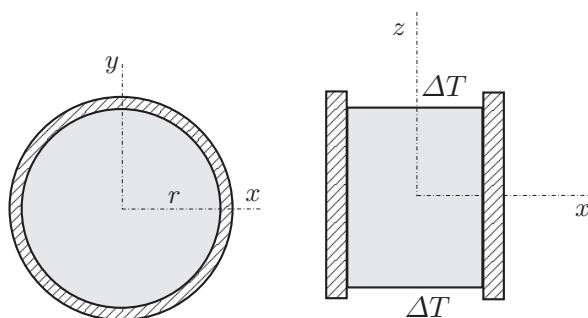
Izračunajte:

- konstante a , b in c ;
- tenzor majhnih deformacij in njegovo vrednost v točki C ;
- specifično spremembo dolžine vlakna v točki C v smeri vektorja \vec{AC} ;
- spremembo pravega kota v točki C med vektorjema v smereh \vec{AC} in \vec{BD} .



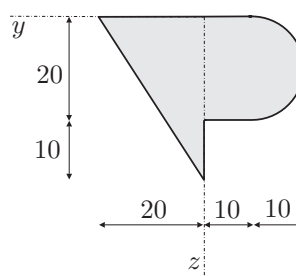
2. V togo, nerazteglivo cev je postavljen valj iz izotropnega, linearno elastičnega materiala. Polmer valja je 5 cm, višina pa 20 cm. Trenje med valjem in cevjo zanemarimo. Valj segrejemo za za $\Delta T = 30$ K.

- Določite normalne napetosti med valjem in cevjo!
 - Določite tudi spremembo višine valja.
- Podatki: $\nu = 0.2$, $E = 2 \cdot 10^4$ kN/cm²,
 $\alpha = 1.1 \cdot 10^{-5}$ K⁻¹.

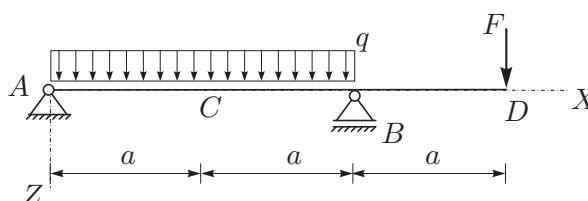


3. Izračunajte geometrijske karakteristike (A , y_T , z_T , I_y , I_z , I_{yz} , I_y^T , I_z^T , I_{yz}^T) lika na sliki!

Podatki so v centimetrih.



4. Za konstrukcijo na sliki izrazite upogibnico in izvednotite vertikalna pomika v točkah C in D ! Podatki: $a = 3$ m, $q = 2$ kN/m, $F = 10$ kN, $E = 2500$ kN/cm², $A = 400$ cm², $I_y = 200000$ cm⁴.



1. NALOGA

a.) $A = A' \quad (0,0) = (0,0) \checkmark$

$B + u_B = B' \quad (L,0) + (aL,0) = (L+x_1,0)$
 $\Rightarrow \boxed{a = \frac{x_1}{L}} = \frac{2}{10^3} = 2 \cdot 10^{-3}$

$E + u_C = C' \quad (L,L) + (aL, bL + cL^2) = (L+x_1, L+y_1)$

$a = \frac{x_1}{L} \quad bL + cL^2 = y_1$

$D + u_D = D' \quad (0,L) + (0, bL) = (0, L-y_2)$

$bL = -y_2$

$\boxed{b = -\frac{y_2}{L}}$

$\boxed{c = \frac{y_1 + y_2}{L^2}}$

$b = -1 \cdot 10^{-3}$

$c = \frac{4}{10^6} = 4 \cdot 10^{-6} \text{ mm}^{-1}$

b.) $F = \begin{bmatrix} a & 0 \\ cy & b+cx \end{bmatrix}$

$E = \begin{bmatrix} a & \frac{cy}{2} \\ \frac{cy}{2} & b+cx \end{bmatrix}$

$E|_{1000,1000} = \begin{bmatrix} 2 \cdot 10^{-3} & 2 \cdot 10^{-6} \cdot 10^3 \\ 2 \cdot 10^{-6} \cdot 10^3 & -1 \cdot 10^{-3} + 4 \cdot 10^{-6} \cdot 10^3 \end{bmatrix}$

$E|_c = 10^{-3} \begin{bmatrix} 2 & 2 \\ 2 & 3 \end{bmatrix}$

c.) $\vec{AC} = (1,1) \cdot L$

$e_{AC} = \frac{1}{\sqrt{2}} (1,1)$

$\varepsilon_{AC} = \frac{1}{2} \cdot 10^{-3} [1 \ 1] \begin{bmatrix} 2 & 2 \\ 2 & 3 \end{bmatrix} \begin{bmatrix} 1 \\ 1 \end{bmatrix} = \frac{10^{-3}}{2} [1 \ 1] \begin{bmatrix} 4 \\ 5 \end{bmatrix} = \frac{9}{2} \cdot 10^{-3} = 4.5 \cdot 10^{-3}$

d.) $\vec{BD} = (-1,1)L$

$e_{BD} = \frac{1}{\sqrt{2}} (-1,1)$

$\varepsilon_{BD} = \frac{1}{2} \cdot 10^{-3} [-1 \ 1] \begin{bmatrix} 4 \\ 5 \end{bmatrix} = \frac{1}{2} \cdot 10^{-3}$

$D_{AC, BD} = 10^{-3} \text{ rad}$

2. NALOGA

a.) $[\sigma] \begin{bmatrix} \sigma \\ \tau \\ \tau \\ \sigma \end{bmatrix} = \phi$

$$\sigma_{xz} = 0$$

$$\sigma_{yz} = 0$$

$$\sigma_{zz} = 0$$

$$\epsilon_{xx} = \epsilon_{yy} = 0$$

$$\left. \begin{aligned} 0 = \epsilon_{xx} &= \frac{1+\nu}{E} \sigma_{xx} - \frac{\nu}{E} (\sigma_{xx} + \sigma_{yy}) + \alpha_T \Delta T \\ 0 = \epsilon_{yy} &= \frac{1+\nu}{E} \sigma_{yy} - \frac{\nu}{E} (\sigma_{xx} + \sigma_{yy}) + \alpha_T \Delta T \end{aligned} \right\} - +$$

$$0 = \frac{1+\nu}{E} (\sigma_{xx} - \sigma_{yy}) \Rightarrow \sigma_{xx} = \sigma_{yy}$$

$$0 = \frac{1-\nu}{E} (\sigma_{xx} + \sigma_{yy}) + 2\alpha_T \Delta T$$

$$\Rightarrow \sigma_{xx} = \sigma_{yy} = - \frac{E}{1-\nu} \alpha_T \Delta T$$

$$= - \frac{2 \cdot 10^4 \text{ kN}}{\text{cm}^2 \cdot 0.8} \cdot 1.1 \cdot 10^{-5} \text{ K}^{-1} \cdot 30 \text{ K}$$

$$\boxed{\sigma_{xx} = \sigma_{yy} = -8.25 \text{ kN/cm}^2}$$

b.) $\epsilon_{xx} = - \frac{\nu}{E} (\sigma_{xx} + \sigma_{yy}) + \alpha_T \Delta T$

$$= - \frac{2\nu}{E} \sigma_{xx} + \alpha_T \Delta T$$

$$= \frac{-0.4}{2 \cdot 10^4} (-8.25) + 1.1 \cdot 10^{-5} \cdot 30$$

$$\boxed{\epsilon_{xx} = 4.95 \cdot 10^{-4}}$$

$$\Delta h = \epsilon_{xx} \cdot h = 0.099 \text{ mm}$$

3. NALOGA

$$\textcircled{1} A^{(1)} = 300 \text{ cm}^2$$

$$y^{(1)} = \frac{20}{3} = 6.7 \text{ cm}$$

$$z^{(1)} = \frac{30}{3} = 10 \text{ cm}$$

$$I_y^{(1)} = \frac{A \cdot 30^2}{18} = 15000 \text{ cm}^4$$

$$I_z^{(1)} = \frac{A \cdot 20^2}{18} = 6666.7 \text{ cm}^4$$

$$I_{yz}^{(1)} = \frac{A^2}{18} = 5000 \text{ cm}^4$$

$$\textcircled{2} A^{(2)} = 200 \text{ cm}^2$$

$$y^{(2)} = -5 \text{ cm}$$

$$z^{(2)} = 10 \text{ cm}$$

$$I_y^{(2)} = \frac{20^2 \cdot 10}{12} = 6666.7 \text{ cm}^4$$

$$I_z^{(2)} = \frac{10^2 \cdot 20}{12} = 1666.7 \text{ cm}^4$$

$$I_{yz}^{(2)} = 0$$

$$\textcircled{3} A^{(3)} = \frac{\pi \cdot 10^2}{2} = 157 \text{ cm}^2$$

$$y^{(3)} = \frac{-4 \cdot 10}{3\pi} - 10 = -14.25 \text{ cm}$$

$$z^{(3)} = 10 \text{ cm}$$

$$I_y^{(3)} = \frac{\pi \cdot 10^4}{8} = 3925 \text{ cm}^4$$

$$I_z^{(3)} = 10^4 \left(\frac{\pi}{8} - \frac{9}{9\pi} \right) = 1094 \text{ cm}^4$$

$$I_{yz}^{(3)} = 0$$

$$a.) A = A^{(1)} + A^{(2)} + A^{(3)} = 657 \text{ cm}^2$$

$$b.) y_T = \frac{\sum y^{(i)} A^{(i)}}{A} = -1.88 \text{ cm}$$

$$z_T = \frac{\sum z^{(i)} A^{(i)}}{A} = 10 \text{ cm}$$

$$c.) I_y = I_y^{(1)} + I_y^{(2)} + I_y^{(3)} + z^{(1)2} A^{(1)} + z^{(2)2} A^{(2)} + z^{(3)2} A^{(3)}$$

$$= 91292 \text{ cm}^4$$

$$I_z = I_z^{(1)} + I_z^{(2)} + I_z^{(3)} + y^{(1)2} A^{(1)} + y^{(2)2} A^{(2)} + y^{(3)2} A^{(3)}$$

$$= 59642 \text{ cm}^4$$

$$I_{yz} = 5000 - 6.7 \cdot 10 \cdot 300 + 5 \cdot 10 \cdot 200 + 14.25 \cdot 10 \cdot 157 = 17242 \text{ cm}^4$$

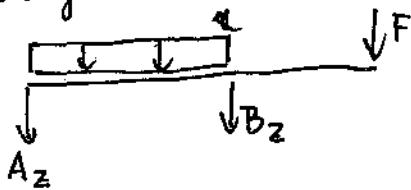
$$d.) I_y^T = I_y - z^2 A = 25592 \text{ cm}^4$$

$$I_z^T = I_z - y_T^2 A = 57319 \text{ cm}^4$$

$$I_{yz}^T = 4921 \text{ cm}^4$$

4. NALOGA

a.) notranje sile



$$A_x = 0$$

$$A_z + B_z = -F - q \cdot 2a = -10 - 2 \cdot 6 = -22 \text{ kN}$$

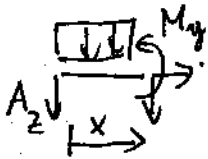
$$-B_z \cdot 6 - F \cdot 9 - q \cdot 6 \cdot 3 = 0$$

$$B_z = -F \cdot \frac{3}{2} - q \cdot 3$$

$$B_z = -21 \text{ kN}$$

$$A_z = -1 \text{ kN}$$

polje ①



$$M_y = -A_z x - q \frac{x^2}{2}$$

$$M_y = x - x^2$$

$$M_y(6) = 6 - 36 = -30 \text{ kNm}$$

kontrola
zveznost momentov o.k.

polje ②



$$M_y = -F x$$

$$x = 3 - x$$

$$M_y = -10x - 20$$

$$M_y = -30 + 10x$$

$$M_y(0) = -30 \text{ kNm}$$

b.) upogibnica

$$\frac{d^2 w}{dx^2} = -\frac{x}{EI_y} + \frac{x^2}{EI_y}$$

$$\frac{dw}{dx} = C_1 - \frac{x^2}{2EI_y} + \frac{x^3}{3EI_y}$$

$$w^{\text{I}}(x) = C_2 + C_1 x - \frac{x^3}{6EI_y} + \frac{x^4}{12EI_y}$$

$$\frac{d^2 w}{dx^2} = \frac{30}{EI_y} - \frac{10x}{EI_y}$$

$$\frac{dw}{dx} = D_1 + \frac{30x}{EI_y} - \frac{10x^2}{2EI_y}$$

$$w^{\text{II}}(x) = D_2 + D_1 x + \frac{15x^2}{EI_y} - \frac{5x^3}{3EI_y}$$

c.) robni pogoji

$$w^{\text{I}}(0) = 0 \Rightarrow C_2 = 0$$

$$w^{\text{I}}(6) = 0 \Rightarrow C_1 \cdot 6 - \frac{6^3}{6EI_y} + \frac{6^4 \cdot 18}{12EI_y} = 0$$

$$C_1 = -\frac{12}{EI_y}$$

$$w^{\text{II}}(0) = 0 \Rightarrow D_2 = 0$$

$$\left. \frac{dw^{\text{I}}}{dx} \right|_{x=6} = \left. \frac{dw^{\text{II}}}{dx} \right|_{x=0}$$

$$-\frac{12}{EI_y} - \frac{6^2}{2EI_y} + \frac{6^3}{3EI_y} = D_1$$

$$D_1 = \frac{42}{EI_y}$$

$$w^{(1)}(x) = \frac{1}{EI_y} \left(-12x - \frac{x^3}{6} + \frac{x^4}{12} \right)$$

$$w^{(2)}(x) = \frac{1}{EI_y} \left(42x + 15x^2 - \frac{5}{3}x^3 \right)$$

$$w_c = w^{(1)}(3) = \frac{1}{20 \cdot 10^4 \cdot \text{cm}^4 \cdot 2500 \text{ kN/cm}^2} \left(-12 \cdot 3 - \frac{3^3}{6} + \frac{3^4}{12} \right) \text{ kN} \cdot \text{m}^3$$

$$= - \frac{33.75 \cdot 10^6 \text{ cm}}{500 \cdot 10^6} = \underline{\underline{-0.0675 \text{ cm}}}$$

$$w_D = w^{(2)}(3) = \frac{1}{20 \cdot 10^4 \text{ cm}^4 \cdot 2500 \text{ kN/cm}^2} \left(42 \cdot 3 + 15 \cdot 9 - 5 \cdot 9 \right) \text{ kN} \cdot \text{m}^3$$

$$= \frac{216 \cdot 10^6 \text{ cm}}{500 \cdot 10^6} = \underline{\underline{0.432 \text{ cm}}}$$